

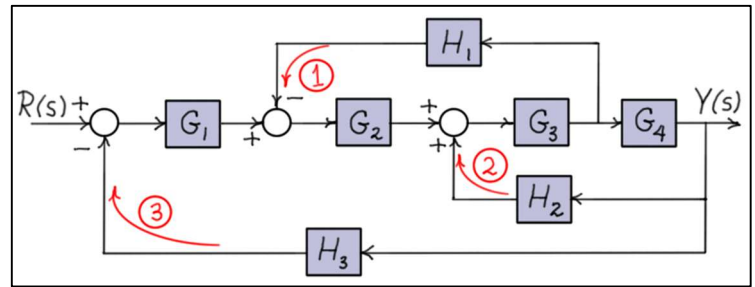
Introductory Control Systems

Block Diagram Reduction Examples

Example 1: R.C. Dorf and R.H. Bishop, *Modern Control Systems*, 11th Ed., Pearson Prentice-Hall, 2008.

Given: The system shown in the block diagram has **one input** signal, $R(s)$, and **one output** signal, $Y(s)$.

Find: Using **block diagram reduction**, find the transfer function $\frac{Y}{R}(s)$.



Example 2.7 from Dorf and Bishop

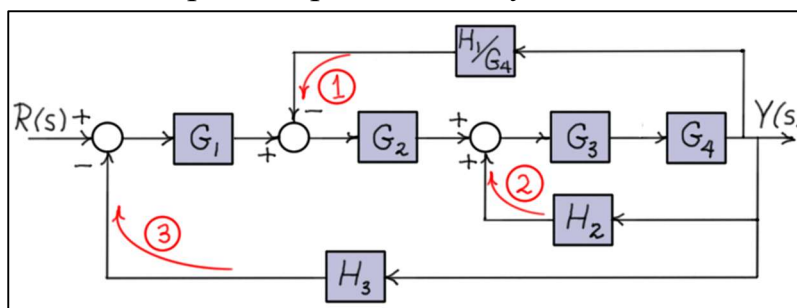
Solution:

First, it should be noted that there are **many solution paths** that can be taken to reduce complex systems using block diagram reduction techniques. The system shown here is not very complex, and yet, there are at least half a dozen approaches that can be taken. To encourage the reader to consider different solution paths, multiple approaches are presented here.

As shown, the system has **three feedback loops**. Loops 1 and 2 are **nested** in loop 3 but loops 1 and 2 are **overlapping**. To determine if two loops are overlapping, consider **collapsing** one of the two loops. If any signals required by the second loop would be **removed** by collapsing of the first, then the two loops are overlapping. In this system, if loop 1 is reduced, the summing block between G_2 and G_3 is eliminated, so the H_2 feedback cannot be maintained. If loop 2 is reduced, the signal between G_3 and G_4 is eliminated, so the H_1 feedback cannot be maintained.

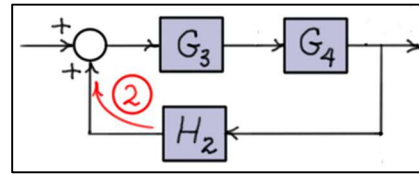
Approach 1:

In this first approach, loop 2 is **nested** within loop 1 by **expanding** loop 1 as shown in the diagram below. This is accomplished by moving the pick-off point of loop 1 to be behind G_4 . This requires that feedback transfer function H_1 be divided by G_4 . Loop 2 is now nested within loop 1 which is nested within loop 3. Hence, reduction of loop 2, followed by reduction of loop 1, and finally the reduction of loop 3 will produce the system transfer function.

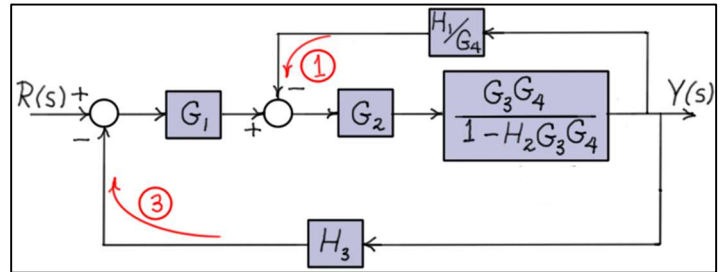


Loop 2 transfer function:

$$\frac{G}{1 - GH} = \frac{G_3 G_4}{1 - H_2 G_3 G_4} \quad (\text{positive feedback})$$



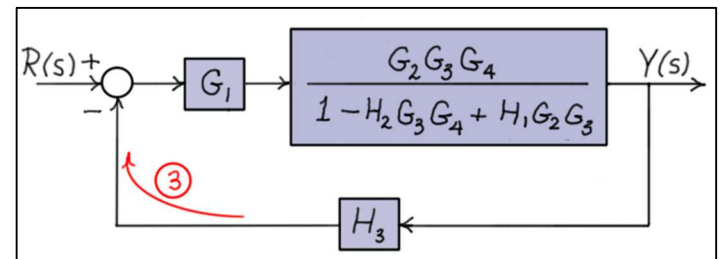
Transfer functions G_3 and G_4 are combined, then the positive feedback loop is collapsed. Now, substitute this result into the original diagram and then reduce the modified loop 1.



Loop 1 transfer function:

$$\frac{G}{1 + GH} = \frac{\frac{G_2 G_3 G_4}{1 - H_2 G_3 G_4}}{1 + \left(\frac{G_2 G_3 \cancel{G_4}}{1 - H_2 G_3 G_4} \right) \left(\frac{H_1}{\cancel{G_4}} \right)} = \frac{G_2 G_3 G_4}{1 - H_2 G_3 G_4 + H_1 G_2 G_3} \quad (\text{negative feedback})$$

Now, substitute this result into the diagram and reduce the modified loop 3 to find the system transfer function.

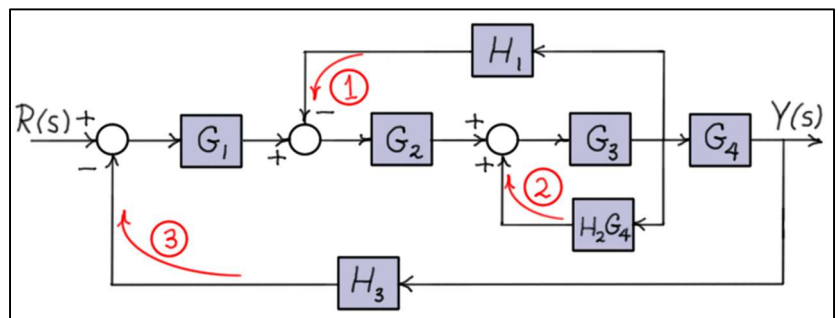


System transfer function:

$$\frac{Y}{R}(s) = \frac{G}{1 + GH} = \frac{\frac{G_1 G_2 G_3 G_4}{1 - H_2 G_3 G_4 + H_1 G_2 G_3}}{1 + \left(\frac{G_1 G_2 G_3 G_4}{1 - H_2 G_3 G_4 + H_1 G_2 G_3} \right) H_3} = \frac{G_1 G_2 G_3 G_4}{1 - H_2 G_3 G_4 + H_1 G_2 G_3 + H_3 G_1 G_2 G_3 G_4}$$

Approach 2:

In this approach, loop 2 is nested within loop 1 by contracting loop 2 as shown in the diagram. This is accomplished by moving the pick-off point of loop 2 ahead of G_4 . This requires that feedback transfer function H_2 be multiplied by G_4 .



As in the first approach, loop 2 is now **nested** within loop 1 which is **nested** within loop 3.

Loop 2 transfer function:

$$\frac{G}{1 - GH} = \frac{G_3}{1 - H_2 G_3 G_4} \quad (\text{positive feedback})$$

Now, substitute this result into the original diagram and then reduce the modified loop 1.

Loop 1 transfer function:

$$\frac{G}{1 + GH} = \frac{\frac{G_2 G_3}{1 - H_2 G_3 G_4}}{1 + H_1 \left(\frac{G_2 G_3}{1 - H_2 G_3 G_4} \right)} = \frac{G_2 G_3}{1 - H_2 G_3 G_4 + H_1 G_2 G_3} \quad (\text{negative feedback})$$

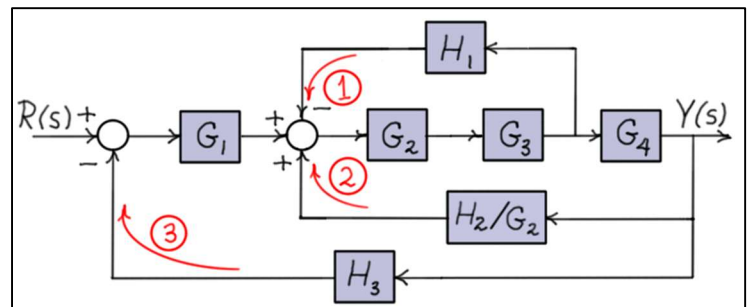
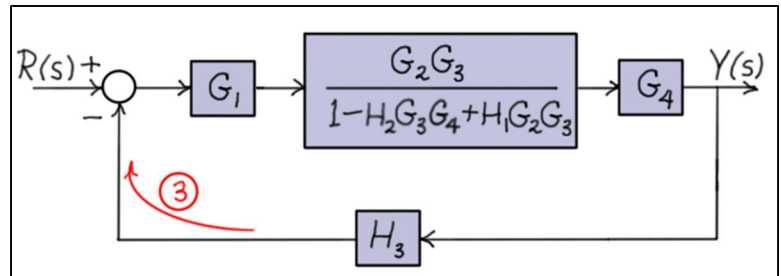
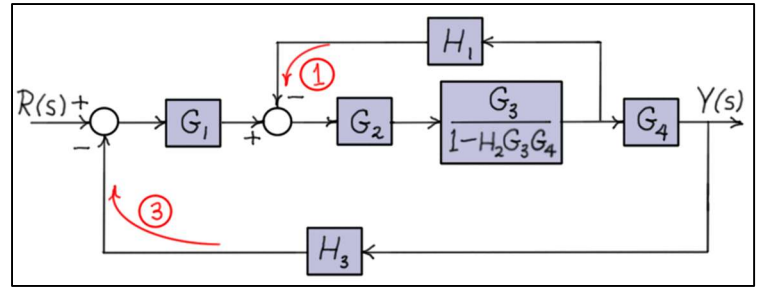
Substituting this result into the diagram and reducing loop 3 gives the system transfer function.

System transfer function:

$$\frac{Y}{R}(s) = \frac{G}{1 + GH} = \frac{\frac{G_1 G_2 G_3 G_4}{1 - H_2 G_3 G_4 + H_1 G_2 G_3}}{1 + H_3 \left(\frac{G_1 G_2 G_3 G_4}{1 - H_2 G_3 G_4 + H_1 G_2 G_3} \right)} = \frac{G_1 G_2 G_3 G_4}{1 - H_2 G_3 G_4 + H_1 G_2 G_3 + H_3 G_1 G_2 G_3 G_4}$$

Approach 3:

Loop 1 can also be **nested** within loop 2 by **expanding** loop 2 as shown in the diagram below. This is accomplished by moving the summing block of loop 2 ahead of G_2 . This requires that feedback transfer function H_2 be divided by G_2 . Now, loop 1 is nested within loop 2 which is nested within loop 3.



Loop 1 transfer function:

$$\frac{G}{1+GH} = \frac{G_2 G_3}{1+H_1 G_2 G_3} \quad (\text{negative feedback})$$

Now, substitute this result into the original diagram and then reduce the modified loop 2.

Loop 2 transfer function:

$$\frac{G}{1-GH} = \frac{\frac{G_2 G_3 G_4}{1+H_1 G_2 G_3}}{1 - \frac{H_2}{G_2} \left(\frac{G_2 G_3 G_4}{1+H_1 G_2 G_3} \right)} = \frac{G_2 G_3 G_4}{1+H_1 G_2 G_3 - H_2 G_3 G_4} \quad (\text{positive feedback})$$

Substituting this result into the diagram and reducing loop 3 gives the system transfer function.

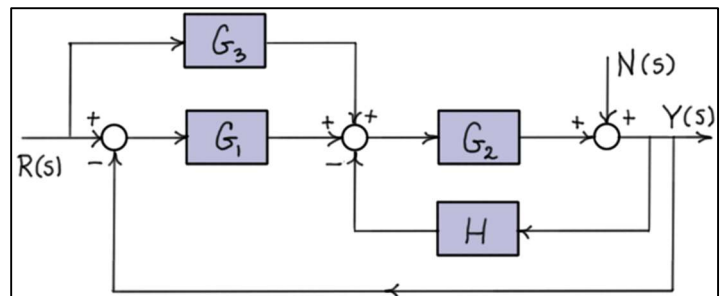
System transfer function:

$$\frac{Y}{R}(s) = \frac{G}{1+GH} = \frac{\frac{G_1 G_2 G_3 G_4}{1+H_1 G_2 G_3 - H_2 G_3 G_4}}{1 + H_3 \left(\frac{G_1 G_2 G_3 G_4}{1+H_1 G_2 G_3 - H_2 G_3 G_4} \right)} = \frac{G_1 G_2 G_3 G_4}{1+H_1 G_2 G_3 - H_2 G_3 G_4 + H_3 G_1 G_2 G_3 G_4}$$

Example 2: Benjamin C. Kuo, *Automatic Control Systems*, 7th Ed., Prentice-Hall, 1995.

Given: The system shown in the block diagram has **two input** signals, $R(s)$ and $N(s)$, and **one output** signal, $Y(s)$.

Find: Using **block diagram reduction**, find the transfer functions $\frac{Y}{N}(s)$ and $\frac{Y}{R}(s)$.



Problem 3-7 from Kuo

Solution:

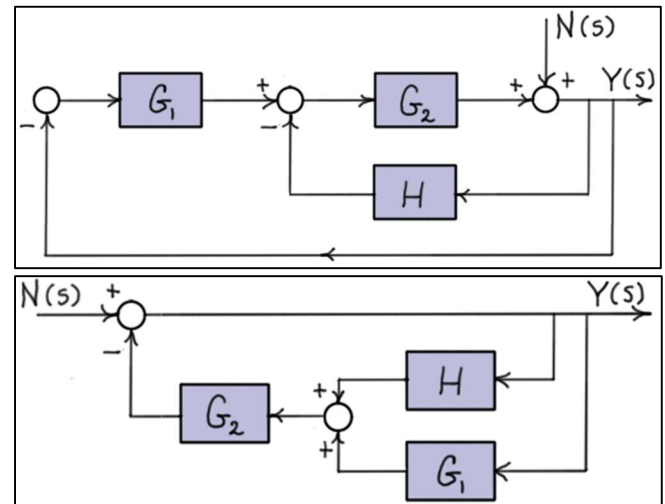
When a system has more than one input signal, transfer functions are found by **setting** all but one of the input signals to **zero**. So, in this case, if both input signals are non-zero, then the output can be written as

$$Y(s) = \left(\frac{Y}{N}(s) \right) N(s) + \left(\frac{Y}{R}(s) \right) R(s)$$

It is understood (but not always written) that $R(s) \triangleq 0$ when finding $\frac{Y}{N}(s)$, and $N(s) \triangleq 0$ when finding $\frac{Y}{R}(s)$. So, each **transfer function** contains information about a **single input, only**.

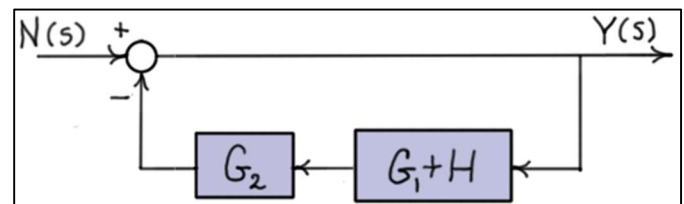
$\frac{Y}{N}(s)$: Approach 1

Setting $R(s) = 0$ in the diagram above gives the diagram on the right. The diagram shows the output $Y(s)$ is fed back through the transfer functions G_1 and H , and those two signals are combined at a summing block before passing through G_2 . To show this more clearly, the system is **redrawn** with the input signal on the left and the output signal on the right.



Note that in the second diagram the signals are added **before** passing them through G_2 , and then the combined signal is **negated** at the next summing block. This is **equivalent** to the sign changes made in the original diagram.

To simplify this diagram, note in the feedback loop that $Y(s)$ is passed through both G_1 and H , and then the two signals are added together. This process is the same as passing $Y(s)$ through the transfer function $G_1 + H$.



The system transfer function can now be calculated as follows.

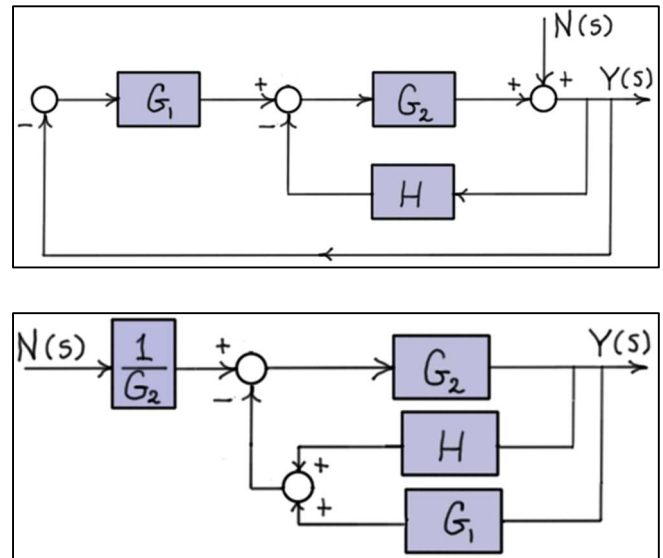
System transfer function:

$$\frac{Y}{N}(s) = \frac{G}{1+GH} = \frac{1}{1+G_2(G_1+H)} = \frac{1}{1+G_1G_2+HG_2}$$

Note here that the transfer functions G_1 and G_2 are **forward-path** transfer functions for the input $R(s)$, but they are **feedback-path** transfer functions for the input $N(s)$.

$$\frac{Y}{N}(s) : \text{Approach 2}$$

In the solution above, $N(s)$ was kept at the same summing block as in the original diagram. As an alternative, consider moving $N(s)$ to the middle summing block. To do this, $N(s)$ must be divided by G_2 as shown in the next diagram. Also, the signals for the H and G_1 paths have been added together before negating the sum of the two signals at the next summing block. As noted above, the transfer functions in the **parallel paths** can be **summed**.



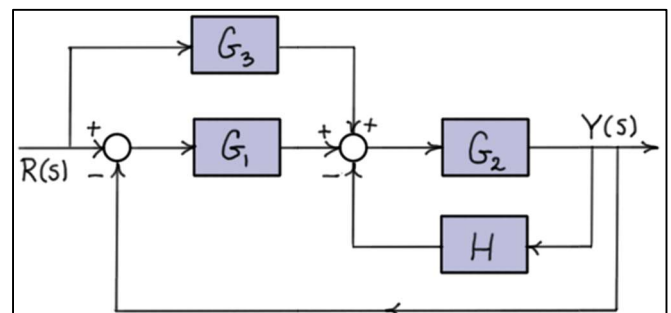
System transfer function:

$$\frac{Y}{N}(s) = \frac{1}{G_2} \left(\frac{G}{1+GH} \right) = \frac{1}{\cancel{G_2}} \left(\frac{\cancel{G_2}}{1+G_2(G_1+H)} \right) = \frac{1}{1+G_1G_2+HG_2} \quad (\text{as before})$$

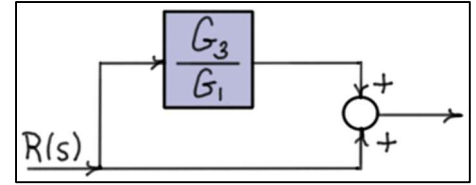
Note that $N(s)$ could also be moved to the first summing block. In this case, it would have to be divided by the product G_1G_2 .

$$\frac{Y}{R}(s) : \text{Approach 1}$$

Setting $N(s) = 0$ in the original diagram gives the diagram on the right. To get started, the input signal $R(s)$ needs to be **isolated** to a **single summing block**.

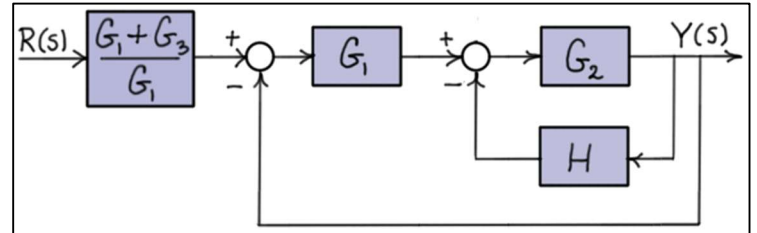


Moving the output of G_3 to the summing block **ahead** of G_1 requires the new signal be divided by G_1 . Isolating the input diagram for $R(s)$ gives the diagram on the right.



Input transfer function: $1 + \frac{G_3}{G_1} = \frac{G_1 + G_3}{G_1}$ (parallel paths)

Substituting this result into the original diagram gives the diagram on the right. Now, the two feedback loops can be reduced, and that result can be cascaded with the input transfer function.



Inner feedback loop transfer function: $\frac{G}{1 + GH} = \frac{G_2}{1 + HG_2}$ (negative feedback)

Outer feedback loop transfer function:

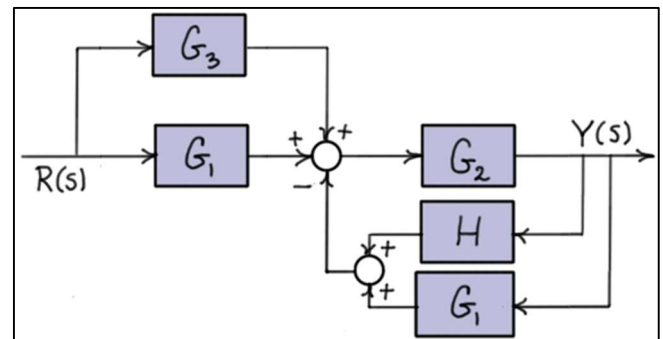
$$\frac{G}{1 + GH} = \frac{G}{1 + G} = \frac{\frac{G_1 G_2}{1 + HG_2}}{1 + \left(\frac{G_1 G_2}{1 + HG_2} \right)} = \frac{G_1 G_2}{1 + HG_2 + G_1 G_2} \quad (\text{negative unity feedback})$$

System transfer function:

$$\frac{Y}{R}(s) = \left(\frac{G_1 + G_3}{\cancel{G_1}} \right) \left(\frac{\cancel{G_1} G_2}{1 + HG_2 + G_1 G_2} \right) = \frac{G_2 (G_1 + G_3)}{1 + HG_2 + G_1 G_2}$$

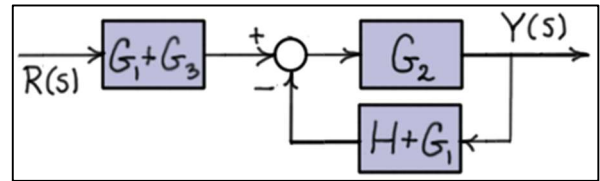
$\frac{Y}{R}(s)$: Approach 2

In this second approach, consider moving the outer feedback loop return to the second summing block as shown in the diagram. This requires the signal to be multiplied by G_1 . In the diagram, the two feedback signals are added first and then negated at the next summing block.



Note here that the signal entering G_2 (which ultimately gets fed back through the two feedback loops) is the same in this diagram as it is in the original. Hence, the diagrams are **equivalent**.

Combining the parallel paths into single transfer functions, the diagram can be redrawn as shown here. The system transfer function can now be calculated by reducing the closed loop and cascading the result with $G_1 + G_3$.

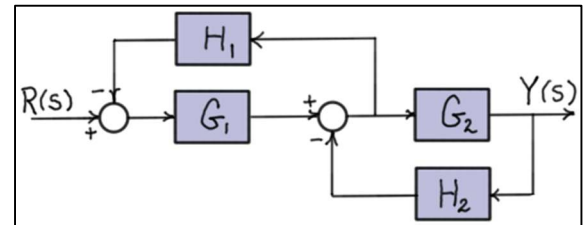


System transfer function:
$$\frac{Y}{R}(s) = (G_1 + G_3) \left(\frac{G_2}{1 + G_2(H + G_1)} \right) = \frac{G_2(G_1 + G_3)}{1 + HG_2 + G_1G_2} \quad (\text{as before})$$

Example 3:

Given: The system shown in the block diagram has one input signal, $R(s)$, and one output signal, $Y(s)$.

Find: Using **block diagram reduction**, find the transfer function $\frac{Y}{R}(s)$.



Solution:

It is tempting with this system to simply **separate** the two feedback loops, but this approach leads to **incorrect results**. As the diagram indicates the two feedback loops are **overlapping**. If the **upper loop** is **collapsed**, the **second summing block** is **removed** and the **lower loop** cannot be **completed**, and if the **lower loop** is **collapsed** the **pick-off point** for the **upper loop** is **removed** and the **upper loop** cannot be **completed**.

When two feedback loops overlap, one of the loops should be expanded to **nest** the other loop within it. In this example, the pick-off point for H_1 could be moved behind G_2 , or the output of H_2 could be moved ahead of G_1 . The latter approach is taken here.

Inner loop transfer function:

$$\frac{G}{1 + GH} = \frac{G_1}{1 + G_1H_1} \quad (\text{negative feedback})$$

System transfer function:

$$\frac{Y}{R}(s) = \frac{G}{1 + GH} = \frac{\frac{G_1G_2}{1 + G_1H_1}}{1 + \left(\frac{H_2}{\cancel{G_1}} \right) \left(\frac{\cancel{G_1}G_2}{1 + G_1H_1} \right)} = \frac{G_1G_2}{1 + G_1H_1 + G_2H_2} \quad (\text{negative feedback})$$

